
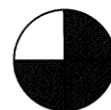

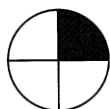
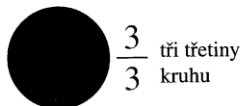
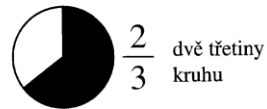
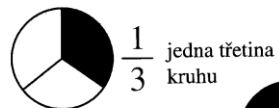
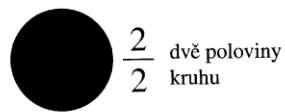
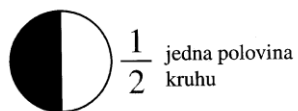


# ZLOMKY

zlomková čára →  $\frac{1}{4}$  ← 

Číslo v čitateli udává, kolik částí zlomek obsahuje.

Číslo ve jmenovateli udává, na kolik částí je celek rozdělen.



Všimněte si, že jedna polovina kruhu je totéž jako dvě čtvrtiny kruhu.

Všimněte si, že  $\frac{2}{2} = 1$  (celek)  $\frac{3}{3} = 1$  (celek)  $\frac{4}{4} = 1$  (celek)

Vybarvi uvedenou část celku.

